



Lire l'heure

1) Coche l'heure indiquée sur chaque horloge :



2 h 12 min 2 h 00 min
 12 h 12 min 2 h 2 min

5 h 6 min 6 h 00 min
 5 h et demie 6 h 5 min

8 h 00 min 8 h 12 min
 12 h 8 min 8 h et demie

2) Ecris l'heure indiquée sur chaque horloge :

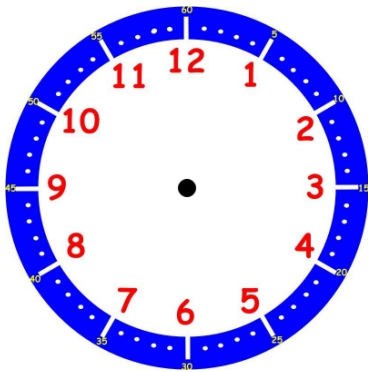


.....

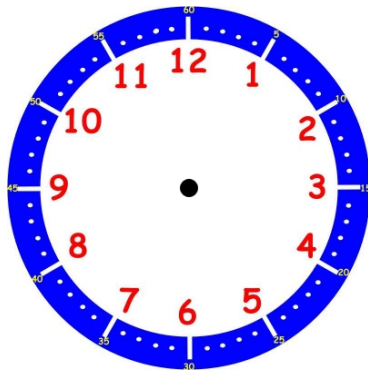
.....

.....

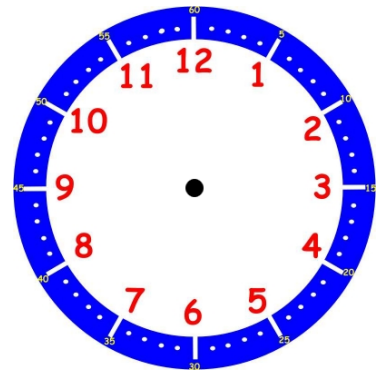
3) Dessine les aiguilles pour indiquer l'heure sur chaque horloge :



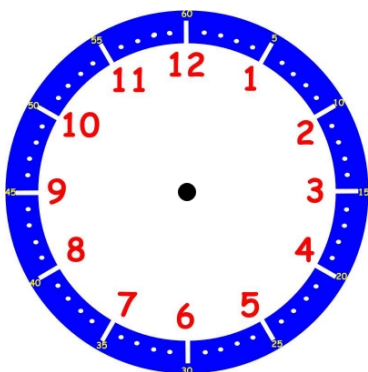
3 h 00 min



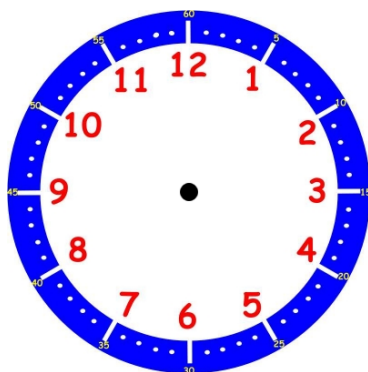
8 h et demie



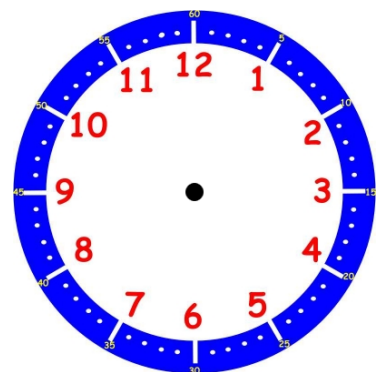
1 h et demie



7 h 00 min



9 h et demie



6 h 00 min